

OCR

Oxford Cambridge and RSA

Accredited

AS Level Further Mathematics B (MEI)**Y413 Modelling with Algorithms**

Printed Answer Booklet

Date – Morning/Afternoon

Time allowed: 1 hour 15 minutes

OCR supplied materials:

- Printed Answer Booklet
- Formulae Further Mathematics B (MEI)

You must have:

- Printed Answer Booklet
- Formulae Further Mathematics B (MEI)
- Scientific or graphical calculator



First name

Last name

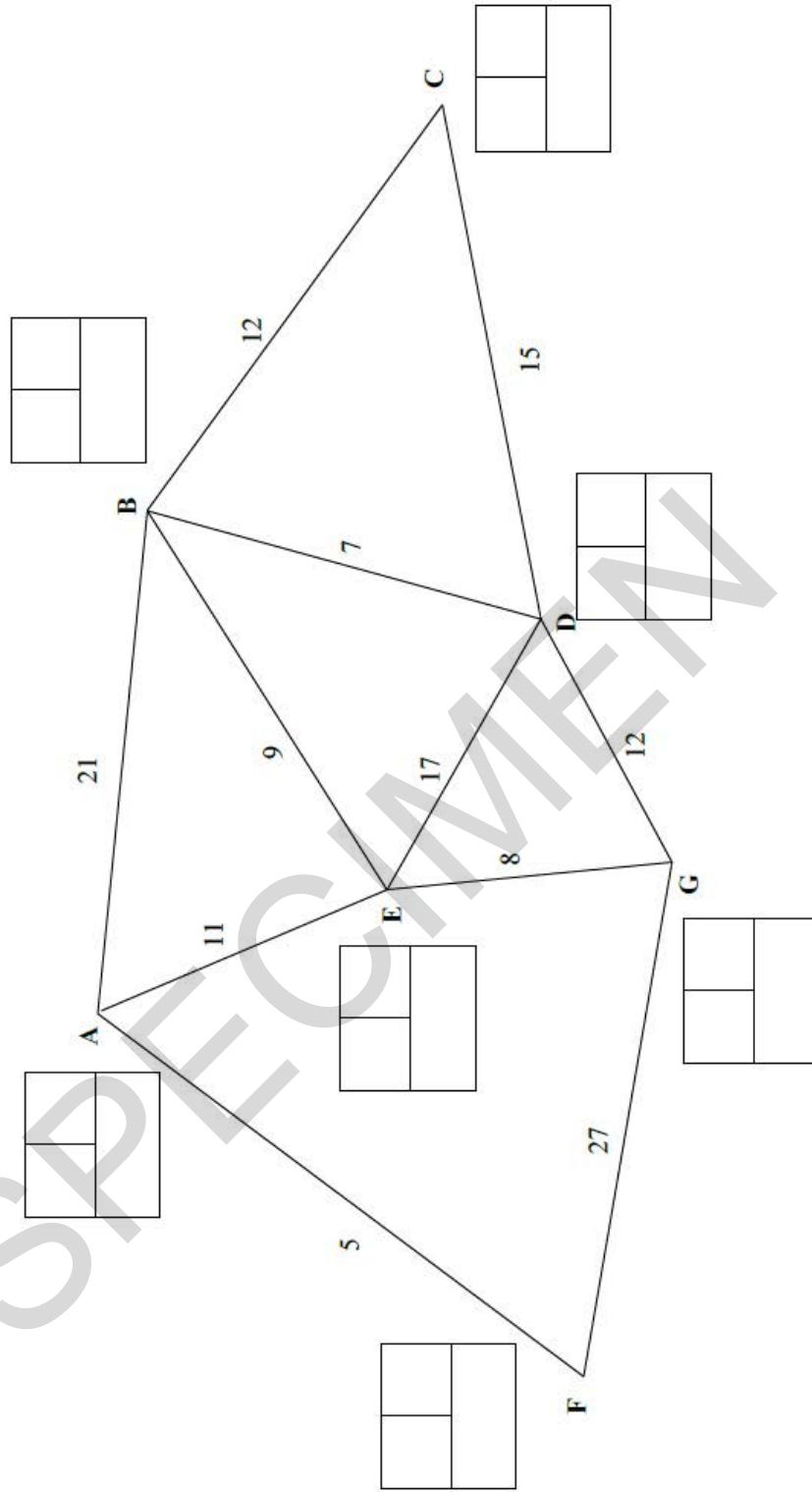
Centre
numberCandidate
number**INSTRUCTIONS**

- Use black ink. HB pencil may be used for graphs and diagrams only.
- Complete the boxes provided on the Printed Answer Booklet with your name, centre number and candidate number.
- Answer **all** the questions.
- **Write your answer to each question in the space provided in the Printed Answer Booklet.**
- Additional paper may be used if necessary but you must clearly show your candidate number, centre number and question number(s).
- Do **not** write in the bar codes.
- You are permitted to use a scientific or graphical calculator in this paper.
- Final answers should be given to a degree of accuracy appropriate to the context.

INFORMATION

- You are advised that an answer may receive **no marks** unless you show sufficient detail of the working to indicate that a correct method is used. You should communicate your method with correct reasoning.
- The Printed Answer Booklet consists of **16** pages. The Question Paper consists of **12** pages.

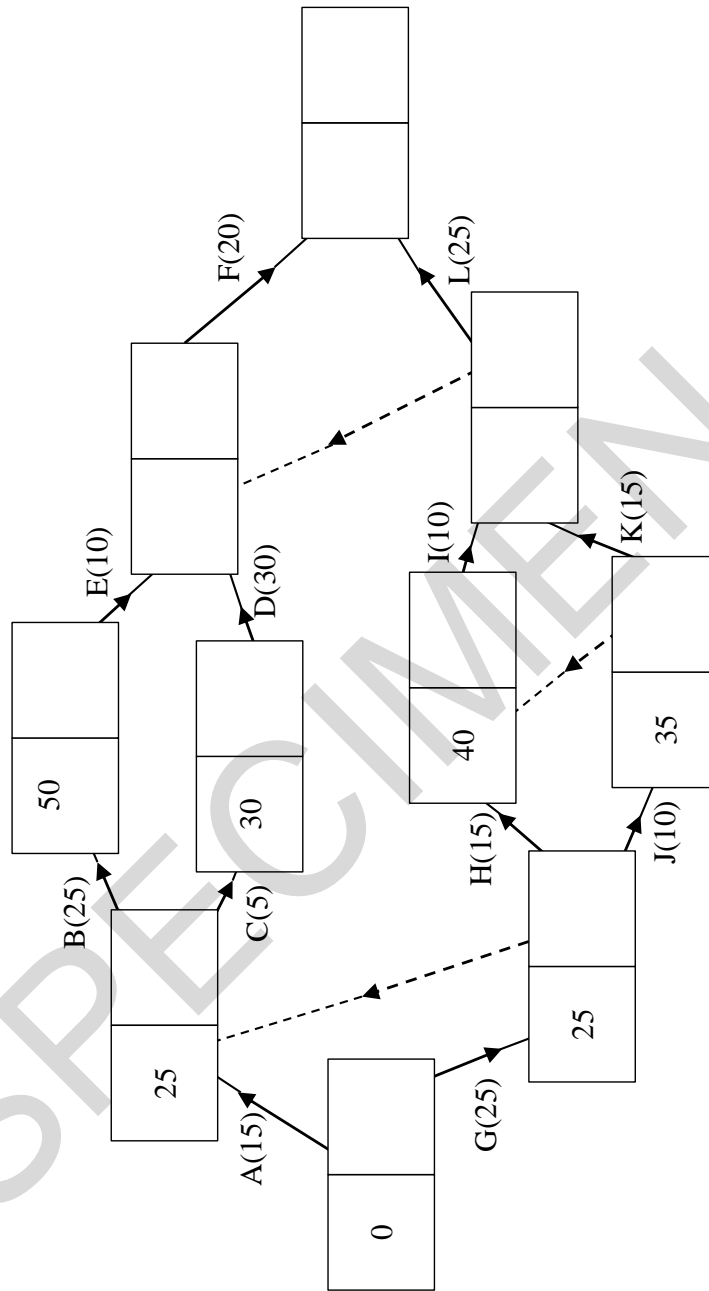
1



A spare copy of the diagram for question 1 can be found on page 13

2 (i)	
2 (ii)	
2 (iii)	
2 (iv)	

3 (i)



A spare copy of the diagram for question 3 (i) can be found on page 14

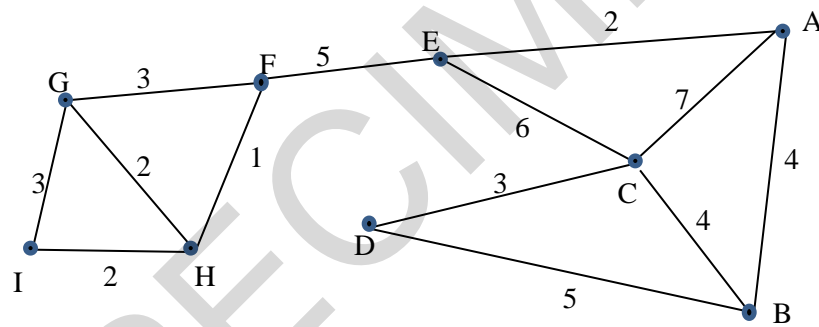
(answer space continued on next page)

3 (i) (continued)	
3 (ii)	
3(iii)	

DO NOT WRITE IN THIS SPACE

4 (i)
(A)

	A	B	C	D	E	F	G	H	I
A		4	7		2				
B	4		4	5					
C	7	4		3	6				
D		5	3						
E	2		6			5			
F					5		3	1	
G						3		2	3
H						1	2		2
I							3	2	



(answer space continued on next page)

4 (i)
(A) **(continued)**

4 (i)
(B)

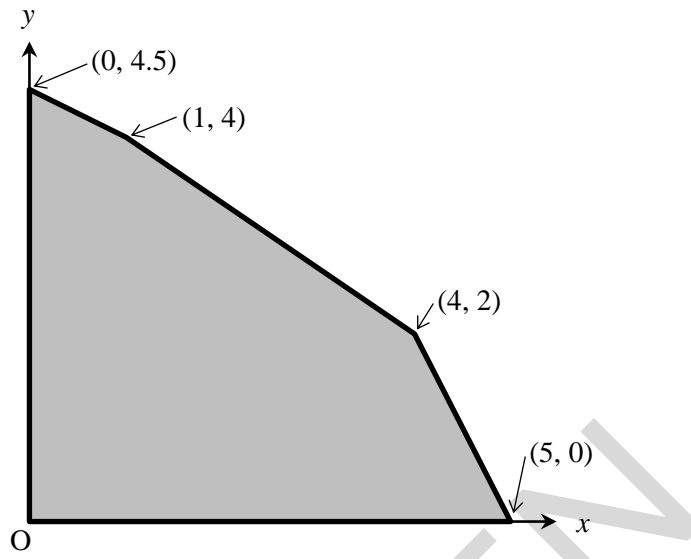
SPECIMEN

4 (ii)	

SPECIMEN

DO NOT WRITE IN THIS SPACE

5 (i)



5 (ii)

SPECIMEN

5 (iii)
(A)

P	x	y	s_1	s_2	s_3	RHS
1	0	0	0	$\frac{1}{6}$	0	$\frac{7}{3}$
0	0	0	1	$-\frac{3}{4}$	$\frac{1}{4}$	1
0	1	0	0	$-\frac{1}{4}$	$\frac{3}{4}$	4
0	0	1	0	$\frac{1}{2}$	$-\frac{1}{2}$	2

P	x	y	s_1	s_2	s_3	RHS

Spare copy of tableau

P	x	y	s_1	s_2	s_3	RHS

5 (iii)
(B)

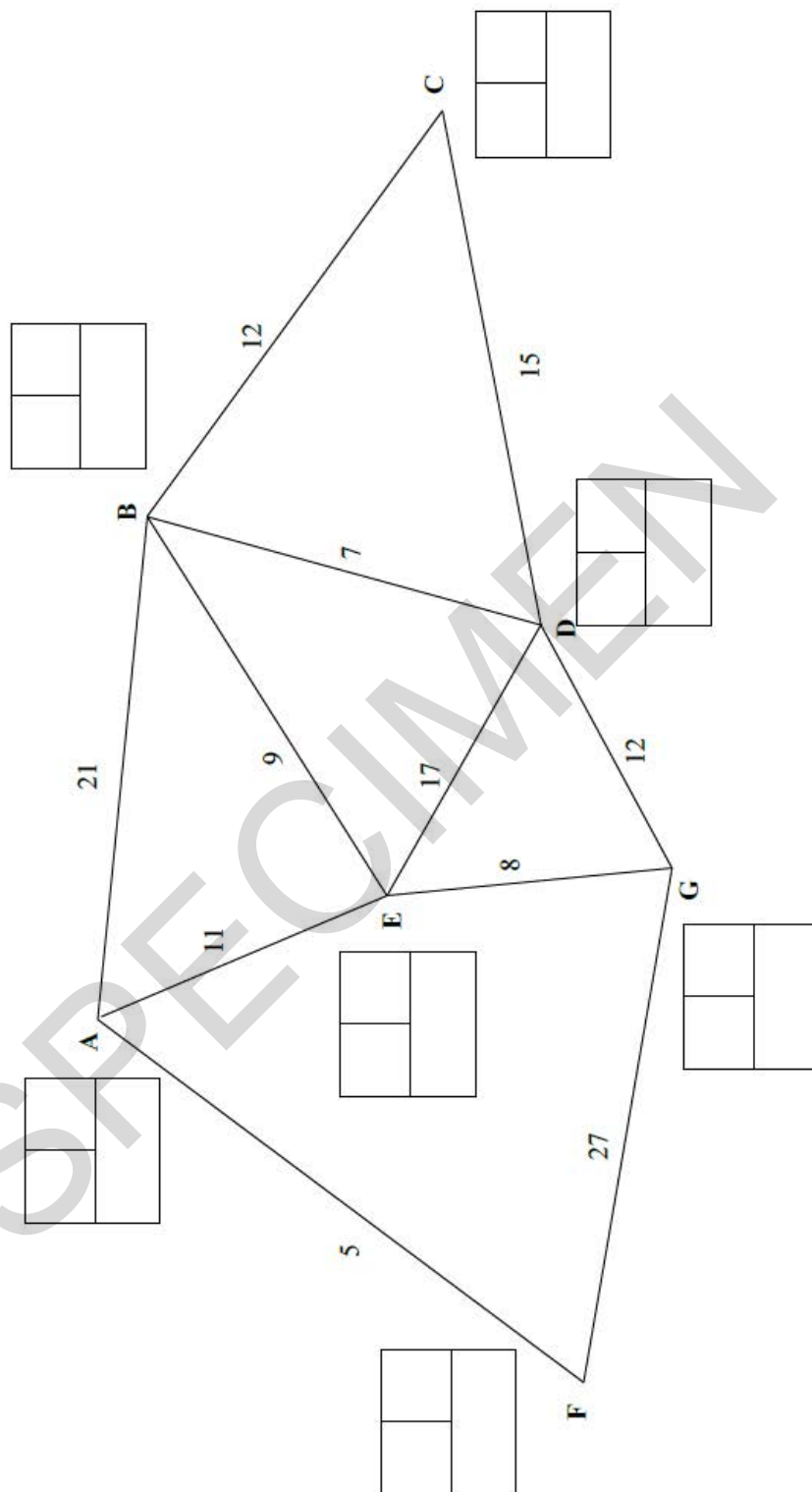
6 (i)	
6 (ii)	
6 (iii)	

SPECIMEN

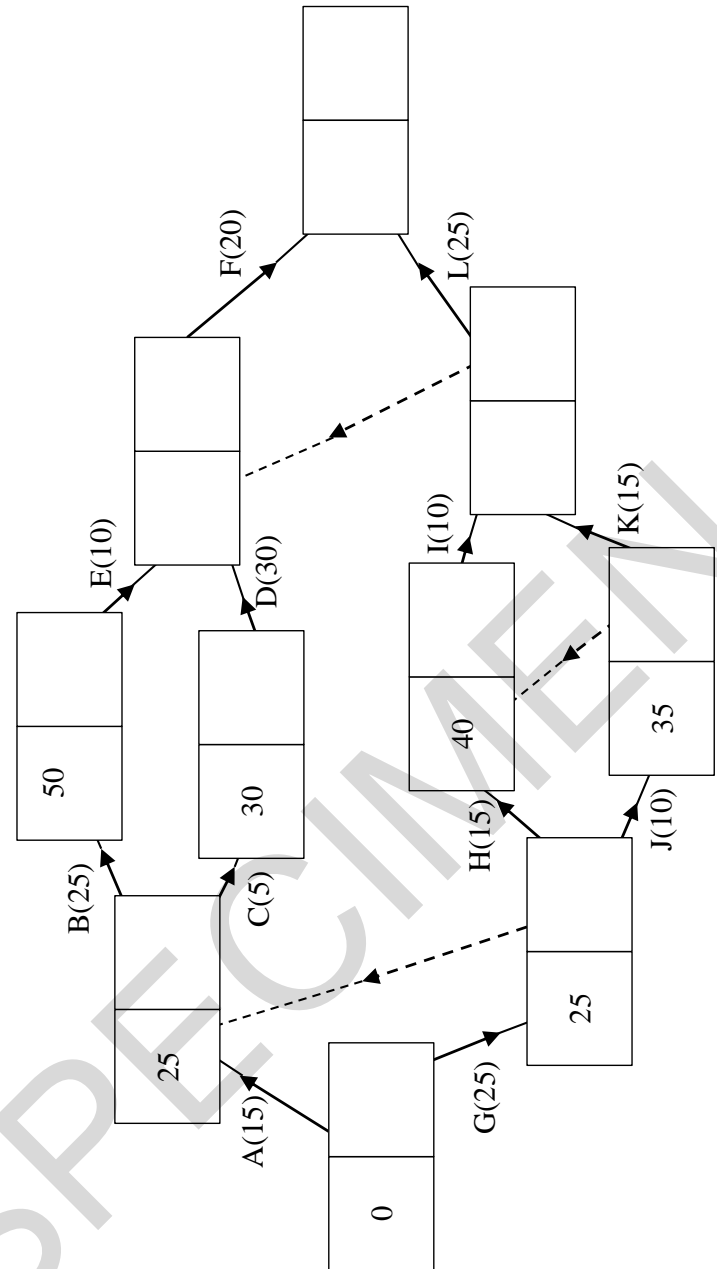
6 (iv)	
6 (v)	
6 (vi)	

SPECIMEN

Spare copy of diagram for question 1



Spare copy of diagram for question 3 (i)



DO NOT WRITE ON THIS PAGE

SPECIMEN

DO NOT WRITE ON THIS PAGE

SPECIMEN

Copyright Information:

OCR is committed to seeking permission to reproduce all third-party content that it uses in the assessment materials. OCR has attempted to identify and contact all copyright holders whose work is used in this paper. To avoid the issue of disclosure of answer-related information to candidates, all copyright acknowledgements are reproduced in the OCR Copyright Acknowledgements booklet. This is produced for each series of examinations and is freely available to download from our public website (www.ocr.org.uk) after the live examination series.

If OCR has unwittingly failed to correctly acknowledge or clear any third-party content in this assessment material, OCR will be happy to correct its mistake at the earliest possible opportunity.

For queries or further information please contact the Copyright Team, First Floor, 9 Hills Road, Cambridge CB2 1GE.

OCR is part of the Cambridge Assessment Group; Cambridge Assessment is the brand name of University of Cambridge Local Examinations Syndicate (UCLES), which is itself a department of the University of Cambridge